



Primrose Schools

ICSE Curriculum
(A Unit of Primrose Educational Trust, Chennai)
An ISO 9001:2015 Certified Institution

State Purpose of Worksheet -Alternate classwork [2019 – 2020]

[KG Class work/Home Assignment/Alternate Class work/ Revision Test/Internal Assessment/Formative Assessment/ Summative Assessment/Preboard

Name:	Std.: II	Subject: EVS
Date:	Term: III	Topic: Ln.: 23: Solar system
Maximum Marks: NA	Time Duration: 40 min	Type of Assessment (if internal assessment): NA

I Fill in the blanks:

- _____ is the hottest planet.
- _____ is the coldest planet.
- _____ is a red planet.
- _____ is the planet where life is possible.
- _____ is the largest planet in the solar system according to their size.

II Answer in one word:

- Moon gets light from ?
- Which is the fixed path in which all the planets go around the sun?
- Which is an imaginary line on which a planet rotates?
- What is the colour of Venus?
- Where do we get heat and light from?

III Answer the following.

1. Name the planets in the solar system.


2. What is an orbit?

3. Draw and colour the solar system.




4. Shade the part of earth which is in darkness:

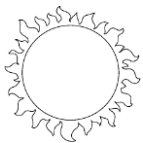
a)



b)



c)



d)

