

Chapter 12: Money

1.How many rupees in all?



+



=



+



=



+



=



+



=

2.How many rupees are left?



- =



- =



- =

3. Which fruits can you buy? Match the correct set of notes and coins with the fruits



₹ 10



₹ 20



₹ 5



₹ 70



₹ 15

4. Tick the correct option

a. ₹5 + ₹10 + ₹2 = _____ i) ₹20 ii) ₹17

b. ₹1 + ₹20 + ₹10 = _____ i) ₹35 ii) ₹31

c. ₹50 - ₹20 = _____ i) ₹30 ii) ₹20

d. ₹20 - ₹5 = _____ i) ₹15 ii) ₹10


5. Comparing Groups of Coins

Use >, < or + in the box



6.a. Answer the following

Lucy is shopping for toys. She has notes and coins with her in her purse. She has notes of Rs.20, Rs.10 and coins of Rs.5 and Rs.2. Help Lucy find out how many of each of these notes or coins she must give to the shopkeeper to buy each of these toys.



Rs

Rs

Rs

Rs

+

+

+

+

Rs 40



Rs

Rs

Rs

+

+

Rs 25



Rs

Rs






Rs

+

+

Rs 27

b. Aaron bought all toys from the top shelf of the toy shop and Abel bought all the toys from the bottom shelf. Can you make a bill for them?

			
Rs 7	Rs 18	Rs 12	Rs 40
			
Rs 35	Rs 20	Rs 25	Rs 14

Aaron's bill

Items	Amount
<input type="text"/>	<input type="text"/>
<input type="text"/>	<input type="text"/>
<input type="text"/>	<input type="text"/>
<input type="text"/>	<input type="text"/>
<input type="text"/>	<input type="text"/>
Total	<input type="text"/>

Abel's bill

Items	Amount
<input type="text"/>	<input type="text"/>
<input type="text"/>	<input type="text"/>
<input type="text"/>	<input type="text"/>
<input type="text"/>	<input type="text"/>
<input type="text"/>	<input type="text"/>
Total	<input type="text"/>

Whose bill is more?

By how much?