

## Ln: 13: MONEY

Find the total amount. Fill in the blanks.



II. Fill in the blanks

1. Write the symbol for the Indian rupee \_\_\_\_\_

2. Write a combination to make Rs. 325 using the least number of notes and coins \_\_\_\_\_



3. How many notes of \_\_\_\_\_ will Raj need for



two \_\_\_\_\_ rupee note? \_\_\_\_\_

4. How many \_\_\_\_\_ rupee coins will Ravi need for one





\_\_\_\_\_ rupee note? \_\_\_\_\_

5. How many \_\_\_\_\_ paisa coins will be equivalent to one \_\_\_\_\_ rupee coin? \_\_\_\_\_





## Practice Time

Read the questions carefully and answer them in the space provided.

Mark bought a  for  and a  for .



He Spent Rs ..... altogether.


---

Lia bought  for . If she bought  She

Would spend Rs .....



---

The cost of  is . For . Sandra can buy .

Milan had . He spent  on a .

He has Rs ..... left.

---

A  Cost . Aesop bought .

He Paid Rs .....

---

