



# Primrose Schools



ICSE Curriculum  
(A Unit of Primrose Educational Trust, Chennai)  
An ISO 9001:2015 Certified Institution

## State Purpose of Worksheet – Alternate Classwork [2019 – 2020]



[KG Class work/Home Assignment/Alternate Class work/ Revision Test/Internal Assessment/Formative Assessment/ Summative Assessment/Preboard

Name:	Std: I	Subject: Math
Date:	Term: III	Topic: Money
Maximum Marks: NA	Time Duration: 40 min	Type of Assessment (if internal assessment): NA



### I. Read the questions carefully and answer them in the space provided

Sandeep bought a  for  and a  for .

He Spent Rs ..... altogether.



John bought  for . If she bought . She

Would spend Rs .....

The cost of  is . For . Lucy can  
buy ..... .











Ted had . He spent  on a .

He has Rs ..... left.

A  Cost . Sid bought .

He Paid Rs .....

## II. Fill the boxes

Price of the item		Amount paid	Change to be given
₹5			₹
₹15			₹
₹10			₹
₹8			₹
₹12			₹

## III. Money calculation



Rs. 4



Rs. 5



Rs. 10



Rs. 3



Rs. 1



Rs. 2

### FILL IN THE BLANKS

(1) With Rs.9, I can buy a \_\_\_\_\_ and a \_\_\_\_\_.

(2) With Rs.11, I can buy a \_\_\_\_\_ and a \_\_\_\_\_.