

$$\begin{array}{r} \text{H T O} \\ 481 \\ +359 \\ \hline \\ \hline \end{array}$$

$$\begin{array}{r} \text{H T O} \\ 424 \\ +528 \\ \hline \\ \hline \end{array}$$

$$\begin{array}{r} \text{H T O} \\ 649 \\ +385 \\ \hline \\ \hline \end{array}$$

$$\begin{array}{r} \text{H T O} \\ 631 \\ +714 \\ \hline \\ \hline \end{array}$$

$$\begin{array}{r} \text{H T O} \\ 918 \\ + 26 \\ \hline \\ \hline \end{array}$$


$$\begin{array}{r} \text{H T O} \\ 460 \\ +386 \\ \hline \\ \hline \end{array}$$

III. Solve the given addition problems.


1					2					3							
		1	6	3	+			3	4	5	+			4	4	5	+
		2	4	5				3	7	2				1	6	4	
4					5					6							
		4	6	5	+			3	8	5	+			6	4	5	+
		2	4	5				4	3	6				1	6	7	

IV. Complete these addition sentences.


a) $126 + 32 =$ _____




b) $157 + 296 =$ _____




c) $112 + 174 + 136 =$ _____



d) $523 + 246 =$ _____




e) $543 - 265 =$ _____



V. Solve the story sums.


1. Carrie reads 226 pages on Saturday. She reads 325 pages on Sunday. How many pages did she read over the weekend?



2. There are 167 books in one classroom and 392 books in another. How many books are there altogether in the classroom?



3. Joy has the collection of 263 football cards. His brother has 162 cards. Who has more? How many more does he have?



4. A family drive 208 miles from London to Manchester, and then 213 miles on to Glasgow. How far did they travel altogether?



5. A cricket team score 456 runs in the first innings and then 249 runs in the second innings. How many more did the team score in the first innings than the second innings?

