

Lesson : Division

I. Divide the following:

1) How many groups of 3? _____



2) How many groups of 4? _____




3) How many groups of 2? _____



4) How many groups of 5? _____



5) How many groups of 10? _____




6) How many groups of 3? _____




II. Divide the following into equal groups :



Make groups of 3



Make groups of 4



Make groups of 5



III. Divide the following :

1. Share 6 ice creams equally between Shubi and Anu.




There are ice-creams altogether.

Shubi gets ice-creams.

Anu gets ice-creams.

2. Share 12 apples equally among 4 children.




There are Apples altogether.

There are Children.

Each gets Apples.

3. Share 20 pencils equally among 5 children.



There are pencils altogether.

There are children.

Each gets Pencils.

IV. Divide the following by long division method:

$$16 \div 2$$

$$20 \div 4$$

$$15 \div 3$$

$$42 \div 6$$

$$45 \div 5$$

$$28 \div 4$$

$$56 \div 7$$

$$60 \div 10$$