






Chapter 13 :Data Handling

1. We are in the fruit shop. Different kinds of fruits are sold in the shop. Observe the picture carefully and answer the following questions.

Oranges	
Apples	
Pears	
Strawberries	
Pomegranates	

a) How many oranges are there in the row?

b) How many apples are there in the row?

c) How many pears are there in the row?

d) How many strawberries are there in the row?

e) How many pomegranates are there in the row?



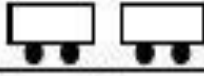



f) Which fruit is the most in number?


g) Which fruit is the least in number?

h) How many fruits are there in the box?

2.

The pictogram below shows the number of cars Mr. James repaired last week

Day	Number of cars repaired
Monday	
Tuesday	
Wednesday	
Thursday	
Friday	
Saturday	
Sunday	


Key:  represents 6 cars

Answer the following questions :

1. How many cars did Mr. James repair on Monday? _____
2. On which day the maximum number of cars were repaired?

3. Did he repair 30 cars on Wednesday? _____
4. On which day Mr. James didn't do any work?
5. How many cars did he repair on Friday and Saturday? _____
6. How much more cars did he repair on Thursday than Wednesday? _____


3. Lucy went to the toy shop and looked at all the toys.



Answer the following questions

1. Which toy was the costliest? _____
2. Which toy was the cheapest? _____
3. Which two toys could she buy if she had 40 rupees?
_____ and _____
4. How many van could she buy if she had Rs.60?
5. Which two toys could she buy if she had Rs.75?

4. Anu has a few fruits in her refrigerator as shown in the picture. Count the number of fruits which she eats every day and answer the following questions.



a) How many fruits did Anu eat on Monday totally?

b) How many apples did Anu eat on Tuesday?




























c) On which day Anu eat least number of fruits?

d) On which day Anu eat more Banana?

e) On which day did Anu eat strawberry?

5. A pie shop sells a range of different pies. Here are the sales figures for the number of pies sold for each day in a week.

Each  represents 20 pies.

Monday							
Tuesday							
Wednesday							
Thursday							
Friday							
Saturday							

1. How many pies were sold on Thursday? _____

2. Which day were the most pies sold? _____

How many pies were sold on that day? _____

3. How many more pies were sold on Tuesday than Wednesday? _____

4. There were more pies sold on the last two days than the first four. True or false? _____

5. How many pies were sold in total that week?
