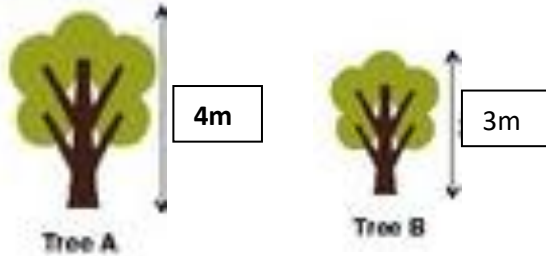


Chapter 6: Length

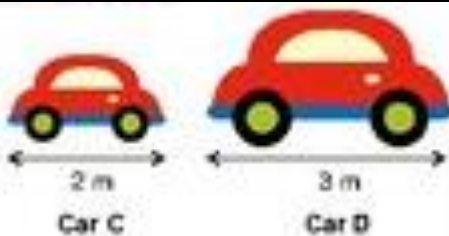
1. Look at the picture and answer the questions:



i) Which tree is taller:

ii) How much taller is it?

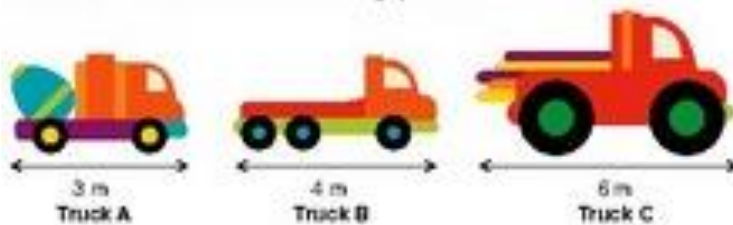
2.



i) Which car is longer?

ii) How much longer is it?

3.

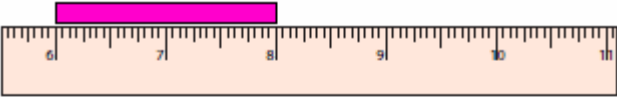
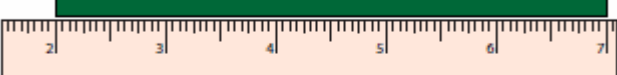






i) Which truck is the shortest truck?

ii) Which truck is the longest truck?

iii) Truck C is _____ metres long than truck A

IV) Truck A is _____ meters long than B

II	Measure the length of each bar	
1)		_____
2)		_____
3)		_____
4)		_____
5)		_____
6)		_____
7)		_____
8)		_____

III	Measure these objects in centimeters:	
1.	Eraser - _____	
2.	Pencil - _____	
3.	Water bottle - _____	
4.	Pencil box - _____	
5.	Toothbrush - _____	
	Arrange the measured objects in assending order	
