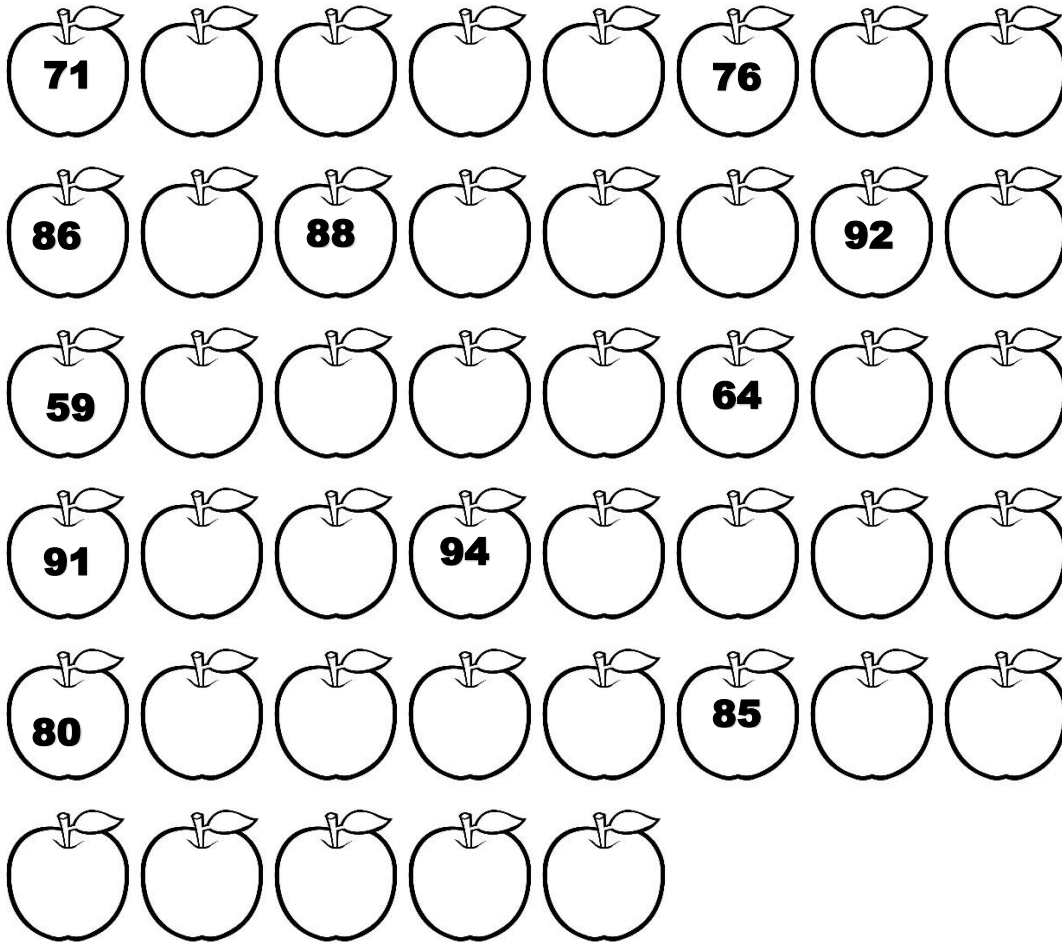






Chapter: 11 - Numbers 51-100



I. Write the missing numbers





II. Write the before, after and between numbers



a)  b) 


c)  d) 

e)  f) 


g)  h) 

III. Write the smallest number


- i)     

Smallest number = 

- ii)     

Smallest number = 

- iii)     

Smallest number = 

IV. Colour the biggest number with blue colour :

i)   

ii)   

iii)   

V. Write the number names

i)56 _____

ii)78 _____

iii)62 _____

iv)100 _____

v)83 _____

VI. Fill in with $>$ or $<$ symbol

"Greater Than" Alligator	"Less Than" Alligator
12  10	17  22
12 is greater than 10	17 is less than 22

a. 7 <input type="text"/> 15	b. 22 <input type="text"/> 19
c. 36 <input type="text"/> 28	d. 62 <input type="text"/> 33
e. 25 <input type="text"/> 49	f. 35 <input type="text"/> 56
g. 70 <input type="text"/> 73	h. 91 <input type="text"/> 82