

Chapter 10: Time


I. Write the number to sequence the actions.




SEQUENCE USING ORDINAL NUMBERS

II. Write the ordinal numbers that tell what place each item is in.





The  is in the _____ place.




The  is in the _____ place.



The  is in the _____ place.



The  is in the _____ place.

WEEKS AND MONTHS

III. Look at the table given below and fill in the blanks accordingly.

Sunday Monday Tuesday Wednesday Thursday Friday Saturday		
<u>Yesterday</u>	<u>Today</u>	<u>Tommorrow</u>
.....	Sunday
.....	Wednesday
.....	Saturday
.....	Friday
.....	Monday

MONTHS

CALENDAR DISCOVERY

The Season is _____

AUGUST 2012						
Sun	Mon	Tues	Wed	Thurs	Fri	Sat
			1	2	3	4
5	6	7	8	9	10	11
12	13	14	15	16	17	18
19	20	21	22	23	24	25
26	27	28	29	30	31	

Today date is

____/____/____

Yesterdays date was

____/____/____

Tomorrows date will be

____/____/____

How many days are in August? _____

What day did July finish on? _____

What day will August finish on? _____

What day will it be on the first of September?

What day will it be on the...

2nd August _____

9th August _____

21st August _____

5th September _____

What will the date be...

3 days after the 7th of August _____

5 days before the 11th of August _____

2 weeks from the 9th of August _____

The weather has been _____



IV. Fill in the blanks

- a. _____ is the first month of the year.
- b. _____ is the seventh month of the year.
- c. _____ is the last month of the year.
- d. _____ months begin with the letter S.
- e. _____ month comes before November.
- f. _____ month comes after July.

V. In which months do you celebrate these festivals.

- a. Independence day _____
- b. Christmas day _____
- c. Gandhi Jayanthi _____
- d. Republic day _____

VI. Write the time for the following clocks.

1 a.



_____ : _____

1 b.



_____ : _____

2 a.



_____ : _____

2 b.



_____ : _____

3 a.



_____ : _____

3 b.



_____ : _____

VII. Read the clock and match the time :



11 : 00

4 : 00



8 : 00

12 : 00



7 : 00

10 : 00



VIII. Tick the activity that takes more time.

