



Primrose Schools

Affiliated to the CISCE Board for ICSE & ISC
Affiliated to the Cambridge University for IGCSE, AS & A Level
An ISO 9001:2015 Certified Institution

NATIONAL PRIMTALENT OLYMPIAD EXAMINATIONS CYBER

CLASS
5

Name :

Section :

Roll no :

Guidelines for the Candidates

1	Please check your Name, Class and Section on the OMR sheet provided to you.
2	In case, OMR sheet with your name is missing, please fill in information about yourself in the blank sheet provided before start of exam.
3	All questions are compulsory. There is no negative marking. Use of calculator is not permitted.
4	There is only ONE correct answer. Choose only ONE option for an answer.
5	To mark your choice of answers by darkening the circles in OMR sheet, use <u>HB Pencil or Blue/Black ball point pen</u> only.
6	Rough work should be done in the blank space provided in the booklet.
7	Return the OMR sheet to the invigilator at the end of the exam
8	Please fill in your personal details in space on the top of this page before attempting the paper

SECTION A - LOGICAL REASONING

1. In a certain code language MEDICINE is written as NFEJDJOF. How will COMPUTER be written in that code language?

- a) DDETIPTD
- b) DPNQVUFS
- c) DPNVQFUS
- d) AWMNXTPO

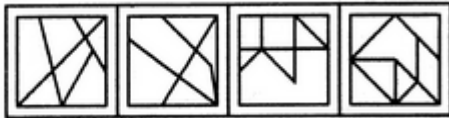
2. RQP, ONM, LKJ, _____ FED

- a) IHG
- b) DBC
- c) KLM
- d) HIJ

3. Find out the alternative figure which contains figure (X) as its part.



(X)



(1)

(2)

(3)

(4)

- a) 1
- b) 2
- c) 3
- d) 4

4. Identify the figure that completes the pattern.



(X)



(1)



(2)



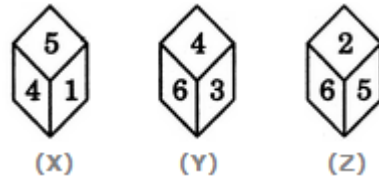
(3)



(4)

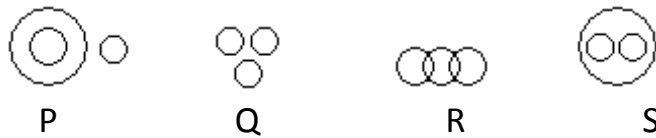
- a) 1
- b) 2
- c) 3
- d) 4

5. Three different positions X, Y and Z of a dice are shown in the figures given below. Which number lies at the bottom face in position X?



- a) 2
- b) 3
- c) 6
- d) 5

6. Which of the following diagrams indicates the best relation between Travelers, Train and Bus?



- a) P
- b) Q
- c) R
- d) S

7. Choose the alternative which is closely resembles the mirror image of the given combination.

1965INDOPAK

- a) 1965INDOPAK
- b) 5961ODNIKAP
- c) 1965INDOPAK
- d) 1965INDOPAK

8. If A is the brother of B; B is the sister of C; and C is the father of D, how D is related to A?

- a) Brother
- b) Sister
- c) Nephew
- d) Niece

9. Joe is younger than Kathy.

Mark was born after Joe.

Kathy is older than Mark.

If the first two statements are true, the third statement is

- a) True
- b) False
- c) Uncertain
- d) None of the above

10. Select a suitable figure from the four alternatives that would complete the figure matrix.

▣	▣▣	▣▣▣
▣▣	▣▣▣▣	▣▣▣▣▣▣
▣▣▣	▣▣▣▣▣▣	?



M



N



O



P

- a) M
- b) N
- c) O
- d) P

SECTION B- COMPUTERS AND INFORMATION TECHNOLOGY

11. The Spellings dialog box can be involved by choosing spellings from _____ menu in MS Word.

- a) Insert
- b) File
- c) Review
- d) View

12. You cannot hear a music CD, if there is no _____ installed on your computer.

- a) Graphics card
- b) Sound card
- c) Mouse
- d) Video card

13. How you can stop the slide show during a presentation

- a) Pressing Delete button.
- b) Pressing Esc button.
- c) Pressing Right arrow.
- d) Pressing Left arrow.

14. Which bar is usually located below that Title Bar that provides categorized options?

- a) Menu Bar
- b) Status Bar
- c) Tool bar
- d) Scroll bar

15. How to insert a table in a slide.

- a) Insert menu & Insert table
- b) Click on the insert table in the content pane of the blank slide.
- c) A and B Both
- d) The table cannot be inserted into a slide.

16. What is the smallest and largest font size available in font size tool on formatting toolbar?

- a) 8 and 72
- b) 8 and 68
- c) 6 and 72
- d) 6 and 68



17. Which of the following is the wrong combination for multimedia software,

- i. Corel Draw – to create graphics and special effects
 - ii. Sound Forge XP – used for sound editing
 - iii. Adobe Premier – used for text editing
 - iv. Adobe PageMaker – used to create 2D animations
- a) Both i and iii
 - b) Only iv
 - c) Both iii and iv
 - d) Only ii

18. Selecting text means, selecting the _____

- a) a word
- b) an entire sentence
- c) whole document
- d) All of the above

19. What component in Windows operating system exactly explains the following?



- a) Folder
- b) File
- c) Document
- d) Drive

20. Which menu in MS Word can be used to change character size and type?

- a) View
- b) Tools
- c) Home
- d) Data

21. What is Extension of PowerPoint Presentation?

- a) .POT
- b) .PPT
- c) .PTP
- d) .PPE

22. _____ refers to sequence of still images representing scenes in motion.

- a) Video
- b) Slide show
- c) Animation
- d) Image

23. Arrange the steps to install a CD-ROM in correct order

- i. Insert the CD-ROM in the CD-ROM drive
- ii. A dialog box window of instructions appears
- iii. Double-click on the CD Drive icon
- iv. Double click on the My Computer –icon
- v. Follow the instructions to install the software

- a) i → iii → v → ii → iv
- b) i → iv → iii → ii → v
- c) i → ii → v → iii → iv
- d) i → iv → iii → v → ii

24. Riya has moved a file from folder A to folder B, however the file appears in both the folders. Hence Riya has _____ the file

- a) Copied the file from Folder A to Folder B
- b) Moved the file from Folder A to Folder B
- c) Copied the file from Folder B to Folder A
- d) Cannot be determined

25. What is the shortcut key to create new files in PowerPoint presentation.

- a) Ctrl + N
- b) Ctrl + S
- c) Ctrl + M
- d) Shift + N

26. _____ is an animated image that is activated on the computer if the computer is idle for a certain specified time



- a) Desktop
- b) Background
- c) Screen saver
- d) Wall paper

27. Choose the correct icon for control panel



28. Choose the correct picture for the given LOGO command REPEAT 3 [FD 50 RT 120]




29. What type of file that the below icon represent?



- a. Spreadsheet file
- b. Text file
- c. Database file
- d. Presentation file

30. Choose the correct LOGO command for the given shape



- a) REPEAT 3 [FD 50 RT 120]
- b) REPEAT 5 [FD RT 120]
- c) REPEAT 5 [FD 100 RT 72]
- d) REPEAT 6 [FD 50 RT 120]

31. What is the full form for PPT

- a) Paint Tab
- b) Pen Paint
- c) Power Paint Presentation
- d) PowerPoint Presentation

32. Which is not a multimedia software

- a) Microsoft PowerPoint
- b) Photoshop
- c) Windows Media Player
- d) Notepad

33. Choose the correct output for the given LOGO command

PRINT DIFFERENCE 105 86

- a) 19
- b) 42
- c) 64
- d) 18

34. A character that is smaller in size and raised above the baseline is known as

- a) Raised
- b) Outlined
- c) Cap script
- d) Superscript

35. Choose the correct output for the given LOGO command

PRINT [HELLO WORLD]

- a) hello world
- b) Hello World
- c) "HELLO WORLD"
- d) HELLO WORLD

SECTION C - ACHIEVERS SECTION

36. A German mathematician Gottfried Leibniz developed a mechanical calculator and he named it as _____

- a) Stepped Reckoner
- b) Difference engine
- c) Analytical engine
- d) Pascaline

37. The _____ drive is used to access the content of a Hard Disk

- a) H: Hard Disk Drive
- b) C: Hard Disk Drive
- c) E: Hard Disk Drive
- d) D: Hard Disk Drive

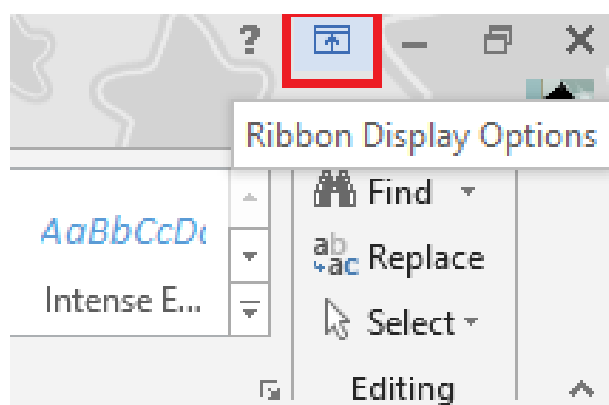
38. If REPEAT n command repeats or loops the commands for n number of times, what is the command used to end the loop.

- a) END
- b) STOP
- c) ENDREPEAT
- d) ENDLOOP

39. Name the Voice-activated assistant for Microsoft mobile phones

- a) Cortana
- b) Siri
- c) Alexa
- d) Echo

40. Which is not included in the Ribbon Display Option on the taskbar in MS Word window



- a) Auto – hide ribbon
- b) Show tabs
- c) Show tabs and command
- d) Auto – show ribbon

